

White

**Rose
Maths**

Year 1 - Spring - Block 1

Subtraction- Maths 1

Use the cards to write as many subtraction sentences as you can.

9

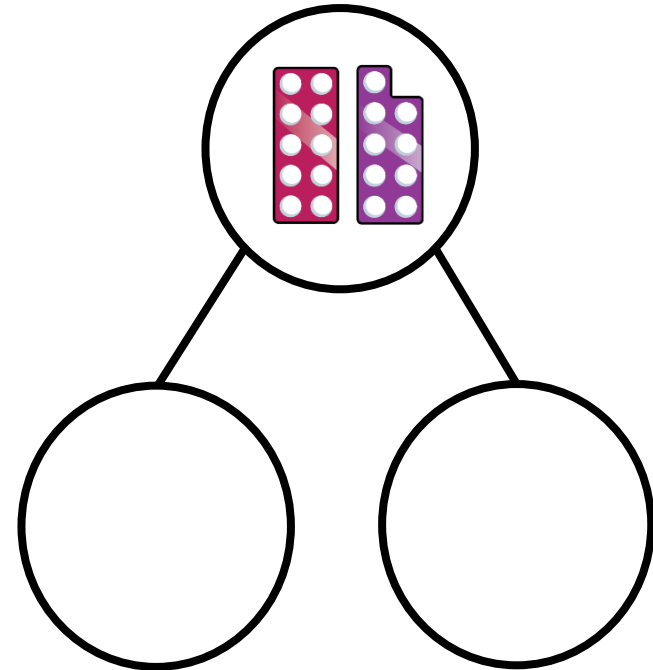
0

10

subtract

19

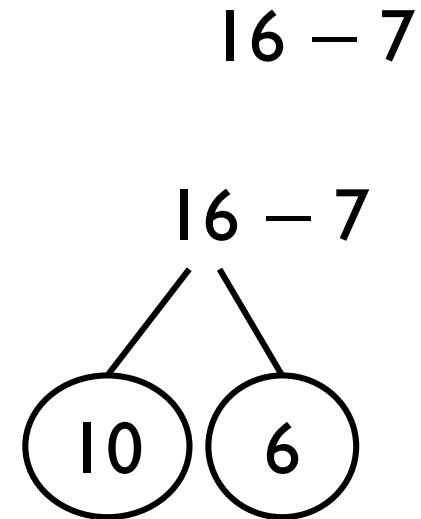
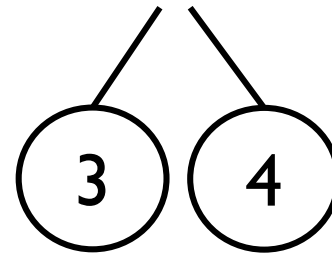
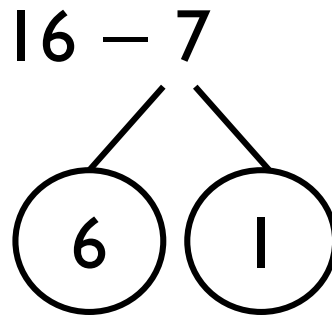
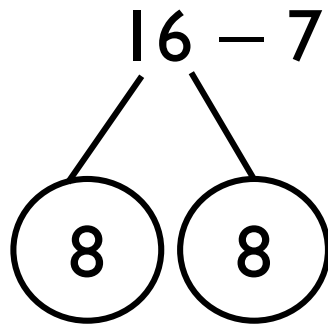
is equal to



Rosie is calculating $16 - 7$


Which of these methods is most helpful?

Why?



Could you find a way to partition 16 to help you subtract 7?

Complete the sentences to create a story and draw a part-whole model.



At first there were ____ apples. Then ____
were eaten. Now there are ____ apples.

Main activity

Write a story to go with the pictures and draw a part-whole model.



Write a story to go with the pictures and draw a part-whole model.

