

White

**Rose
Maths**

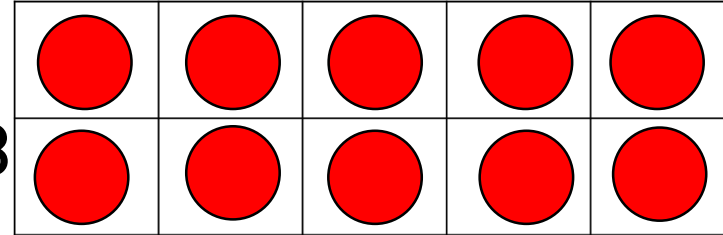
Year 1 - Spring - Block 1

Subtraction- Maths 2

Circle the addition and subtraction number sentences that match the ten frames.

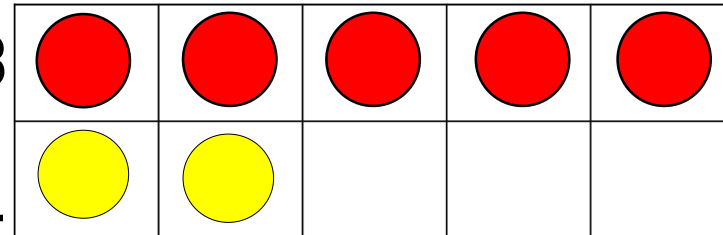
$15 + 3 = 18$

$15 - 3 = 18$



$3 + 18 = 15$

$18 - 15 = 3$



$18 + 3 = 15$

$18 - 3 = 15$

$18 = 3 + 15$

$15 - 18 = 3$

Use $<$, $>$ or $=$ to make the statements correct.
 Use tens frames to help work out the answer. You
 can draw these in your book.

$$17 - 5 \quad \bigcirc \quad 12 - 5$$


$$14 - 4 \quad \bigcirc \quad 18 - 8$$


$$11 - 7 \quad \bigcirc \quad 11 - 4$$


Main Activity

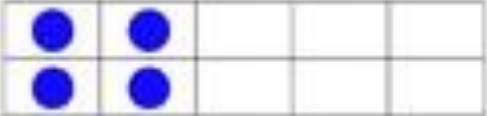
Ten Frame Subtraction


Subtraction means taking away.
Use a dry erase marker to TAKE AWAY the SUBTRAHEND as you solve each subtraction problem.



 $17 - 9 =$



 $17 - 9 =$

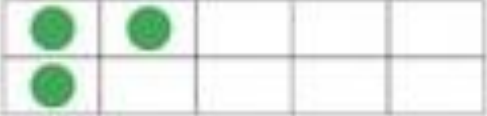

 $14 - 11 =$


 $14 - 11 =$


 $11 - 5 =$


 $11 - 5 =$


 $13 - 8 =$


 $13 - 8 =$