

White

**Rose
Maths**

Year 1 - Spring

**Multiples of 2: Reasoning and
Problem Solving - Tuesday**


Let's recap on counting in 2's

1	2	3	4	5	6	7	8	9	10
11	12	13	14	15	16	17	18	19	20
21	22	23	24	25	26	27	28	29	30
31	32	33	34	35	36	37	38	39	40
41	42	43	44	45	46	47	48	49	50
51	52	53	54	55	56	57	58	59	60
61	62	63	64	65	66	67	68	69	70
71	72	73	74	75	76	77	78	79	80
81	82	83	84	85	86	87	88	89	90
91	92	93	94	95	96	97	98	99	100

<https://www.youtube.com/watch?v=GvTcpfSnOMQ>

<https://www.youtube.com/watch?v=OCxvNtrcDIs>

Spring Missing Numbers Counting in 2s

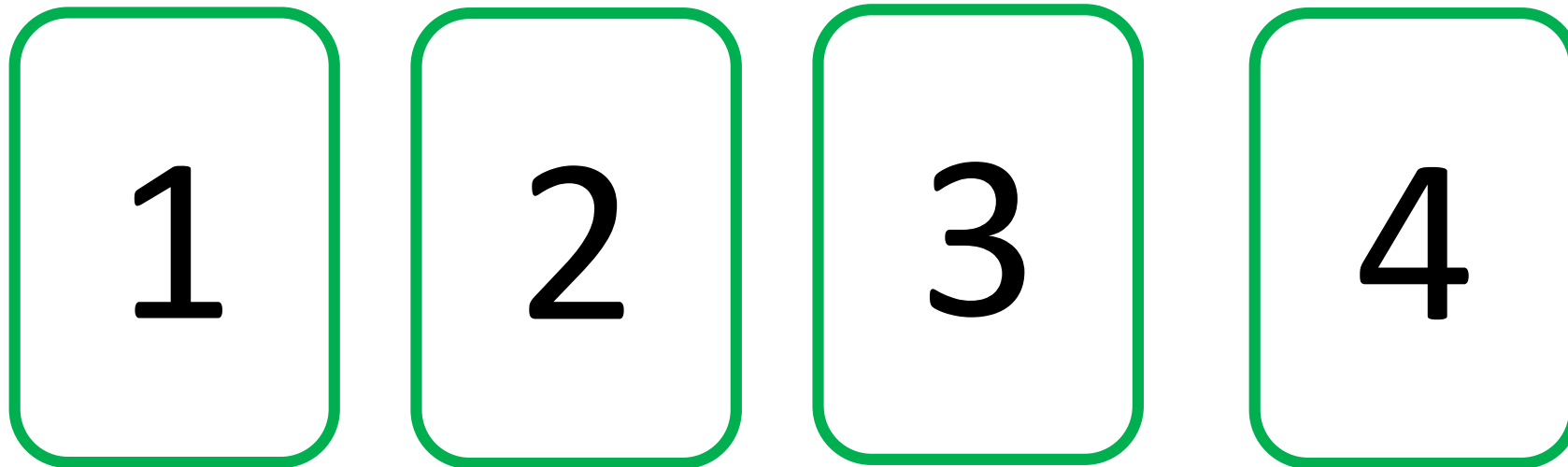


Making Numbers


What is the smallest two-digit number you can make using these cards?

What is the largest two-digit number you can make using these cards?

Can you make a multiple of 2? How do you know?



Poppy is counting the blackberries.



There are 18
blackberries in
total.

Is Poppy correct? Prove it, write your answer.

Main Activity

1.) True or false? There are 10 flowers in total.



Explain your answer. How do you know?

2.) Write the mistake that has been made on the grid.

1	2	3	4	5	6	7	8	9	10
11	12	13	14	15	16	17	18	19	20

3.) Complete the missing numbers by counting forwards in 2s.

