

White

**Rose
Maths**

Year 1 - Spring - Block 1


Subtraction- Maths 4

Amir has 16 apples. Ron has none.

Amir gives Ron 9 apples.

Who has the most apples now?

Show your working





Whitney has 16 sweets and eats 7

Mo has 17 sweets and eats 8 of them.



Who has more sweets left?

Annie, Tommy and Alex are working out which calculation is represented below.

First	Then	Now

$17 - 0 = 17$



$0 - 17 = 17$








$17 - 17 = 0$



Can you work out who is correct? Explain why.

Main Activity

<p>Miss Johnson has 13 cubes. She gives away 3. How many does she have left?</p> 	<p>Adam has 15 cubes. He gives away 7. How many does he have left?</p> 
<p>Maryam has 12 cubes. She gives away 1. How many does she have left?</p> 	<p>Ryan has 17 cubes. He gives away 1. How many does he have left?</p> 
<p>Shen has 15 cubes. She gives away 4. How many does she have left?</p> 	<p>Zain has 10 cubes. He gives away 2. How many does he have left?</p> 