

**White**

**Rose  
Maths**

Year 1 - Spring

**Multiples of 2: Consolidation  
and Word Problems- Friday**

*Let's recap on counting in 2's*

1	2	3	4	5	6	7	8	9	10
11	12	13	14	15	16	17	18	19	20
21	22	23	24	25	26	27	28	29	30
31	32	33	34	35	36	37	38	39	40
41	42	43	44	45	46	47	48	49	50
51	52	53	54	55	56	57	58	59	60
61	62	63	64	65	66	67	68	69	70
71	72	73	74	75	76	77	78	79	80
81	82	83	84	85	86	87	88	89	90
91	92	93	94	95	96	97	98	99	100

<https://www.youtube.com/watch?v=GvTcpfSnOMQ>

<https://www.youtube.com/watch?v=OCxvNtrcDIs>

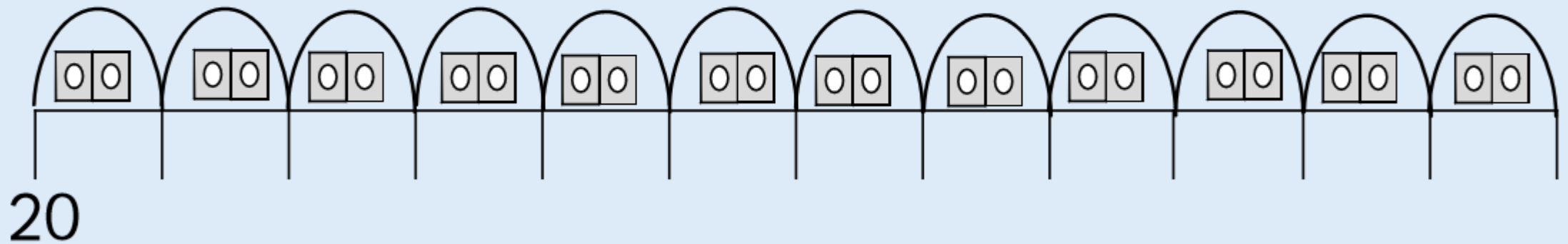
How many socks are there?




There are

socks in total.

Complete the number line by counting in 2s.



# Arrays



How many rows are going across?

How many columns are going down?

What is the multiplication sum?

# Arrays

$$2 \times 4 =$$

How many rows are going across?


How many columns are going down?

Can you create an array and work out the answer?


# Main Activity

## Word Problems

Use one of the methods to help you work out the word problems. You could use either a hundreds square or an array to work them out.

A red party bag with a white handle and colorful stars (yellow, green, blue, purple) scattered across its surface.

Owen had a birthday party and invited 10 friends. He wants to put two whistles in each party bag. How many whistles does he need?



There are 12 sausages in one packet.

How many sausages are in two packets?



Challenge: Can you make a word problem for one of your family members to solve?