




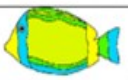
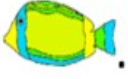








Name

Date



## ADDITION PROBLEMS TO 15 SHEET 1

		WORKING OUT
1)	There are 6  . 5 more  come. How many are there now? _____	
2)	I have 7  . I am given 5  more. How many  do I have? _____	
3)	Bert has 4  . Bill has 8  . How many in all? _____	
4)	A cake shop sells 8  on Monday, and 5  on Tuesday. How many  in total? _____	
5)	I buy 7  on Wednesday. I buy 4  on Friday. How many  did I buy? _____	