

**White**

**Rose  
Maths**

Year 1 - Spring - Block 1

**Addition- Maths 5**

Use your favourite method to work out the following word problems.


- Part whole model
- Tens frame
- Number line

If you had 10 glass bottles and 3 plastic bottles,  
how many bottles are there altogether?



twinkl.com

If you had 14 squares of chocolate and 5 chocolate fingers, how many do you have in total?



twinkl.com






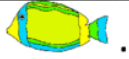







# Main activity

Name \_\_\_\_\_

Date \_\_\_\_\_



## ADDITION PROBLEMS TO 15 SHEET 1

		WORKING OUT
1)	There are 6  . 5 more  come. How many are there now? _____	
2)	I have 7  . I am given 5  more. How many  do I have? _____	
3)	Bert has 4  . Bill has 8  . How many in all? _____	
4)	A cake shop sells 8  on Monday, and 5  on Tuesday. How many  in total? _____	
5)	I buy 7  on Wednesday. I buy 4  on Friday. How many  did I buy? _____	